



ACTIVITY


Name:

Date: June 10, 2014

SCIENCE > EARTH SYSTEM > MINERAL IDENTIFICATION


MATCHING

Match each tool on the left with the mineral property it helps identify on the right!



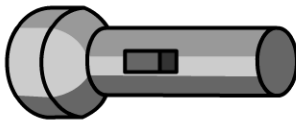
•

• LUSTER




•

• CLEAVAGE/FRACTURE



•

• HARDNESS



•

• COLOR

FURTHER RESEARCH

Find out where the following minerals rank on the Mohs scale, and then order them along the line in the spaces provided.

FLUORITE

FELDSPAR

GYSPUM

APATITE

TOPAZ

DIAMOND

SOFTTEST

HARDEST